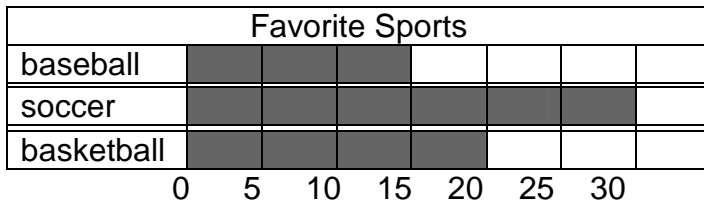


SPIRAL REVIEWS

DAY 46



1. How many more children chose soccer than basketball?


- A. 10
- B. 15
- C. 20
- D. 25

2. How many children were asked about their favorite sport?

- A. 30
- B. 35
- C. 60
- D. 65

3. Which multiplication problem matches the array?

- A. $3 \times 3 = 9$
- B. $2 \times 6 = 12$
- C. $4 \times 3 = 12$
- D. $4 \times 4 = 16$



Find the product.

4. $2 \times 2 =$ _____

- A. 2
- B. 4
- C. 6
- D. 8

5. $4 \times 4 =$ _____

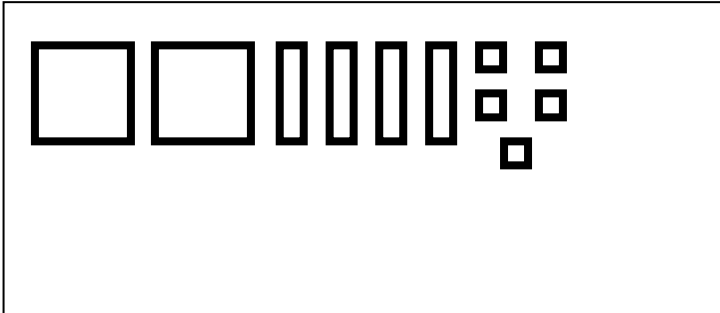
- A. 4
- B. 8
- C. 12
- D. 16

SPIRAL REVIEWS

DAY 47

Draw a model to represent the numbers shown. Write the number word.

1. 245



Read and write the numbers.

2. Two hundred seventy-five _____

3. Four hundred five _____

Complete the addition problems.

4. $435 + 126 =$ _____

5. $333 + 133 =$ _____

6. Write a number that is more than 245 but less than 267. _____

SPIRAL REVIEWS

DAY 48

Favorite Sport	
Skiing	
Golf	
Biking	
Tennis	

1. Which sport is liked the most?

- A. Skiing
- B. Golf
- C. Biking
- D. Tennis

2. Which sport is liked least?

- A. Skiing
- B. Golf
- C. Biking
- D. Tennis

3. How many students like biking and golf?

- A. 9
- B. 25
- C. 30
- D. 35

Complete the following problems.

4.
$$\begin{array}{r} 291 \\ - 28 \\ \hline \end{array}$$

- A. 219
- B. 263
- C. 277
- D. 319

5. $3 \times 2 = \underline{\hspace{2cm}}$

- A. 5
- B. 6
- C. 8
- D. 9

SPIRAL REVIEWS

DAY 49


1. What is the place value of 8 in 7,864?

- A. 8
- B. 80
- C. 800
- D. 8000

2. The sum of the digits of a number is 6. The number is an even number. The tens digit is one more than the hundreds digit. The hundreds digit is one more than the thousands digit. The ones digit is one less than the thousands digit. What is the number?

3. $4 \times 5 = \underline{\hspace{2cm}}$ $5 \times 5 = \underline{\hspace{2cm}}$ $6 \times 5 = \underline{\hspace{2cm}}$
 $7 \times 5 = \underline{\hspace{2cm}}$ $8 \times 5 = \underline{\hspace{2cm}}$ $9 \times 5 = \underline{\hspace{2cm}}$
 $10 \times 5 = \underline{\hspace{2cm}}$

Use the pictograph to answer the questions below.

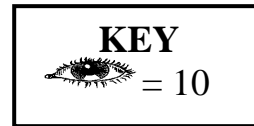
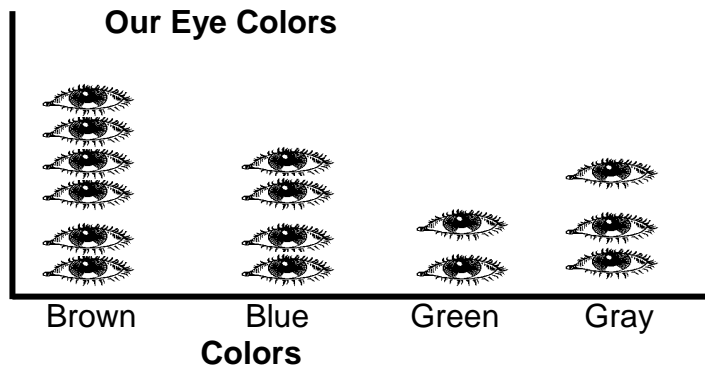


4. Which food was chosen by more students? _____ How many? _____

5. How many more students chose pizza than hot dogs? Show your work. _____

SPIRAL REVIEWS

DAY 50



1. What color has the least?

- A. Brown
- B. Blue
- C. Green
- D. Gray

2. How many eyes are Brown?

- A. 4
- B. 6
- C. 40
- D. 60

3. How many eyes are brown and green?

- A. 8
- B. 16
- C. 24
- D. 80

4. How many more Blue eyes are there than Gray eyes?

- A. 1
- B. 3
- C. 10
- D. 20

5. What number completes the chart?

- A. 6
- B. 10
- C. 16
- D. 28

x	2	3	4	5
2	4	6	8	10
13	26	39	52	65
14		42	56	70
15	30	45	60	75